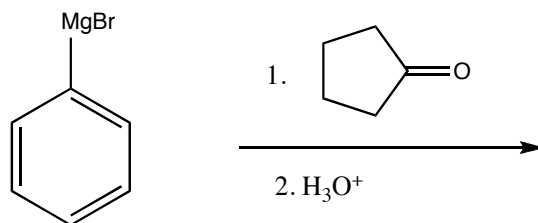
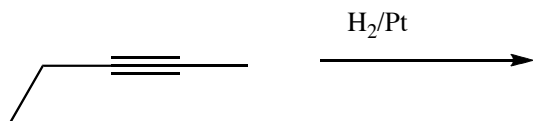
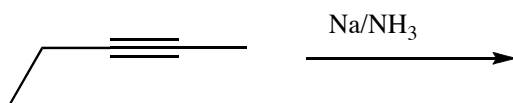
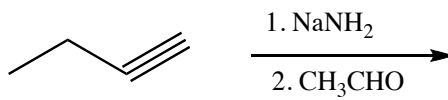
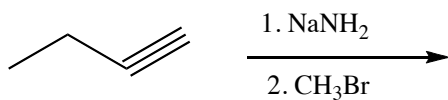


1) Write the expected major organic product for the reactions below:



CHM 3343

Homework Set 3

TUD Department of Chemistry
Spring 2017

Page 2 of 2

2) What is it?

